

Name \_\_\_\_\_

Class \_\_\_\_\_

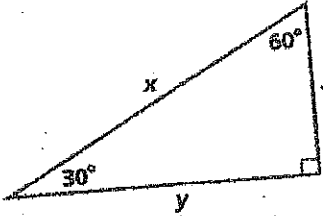
Date \_\_\_\_\_

Special Right Triangles

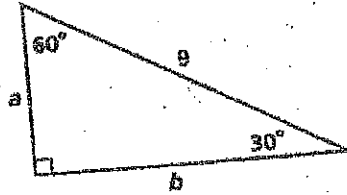
**Practice 7-3**

Find the value of each variable. Leave your answers in simplest radical form.

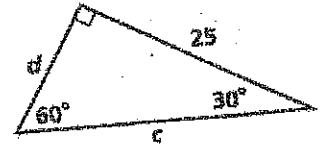
1.



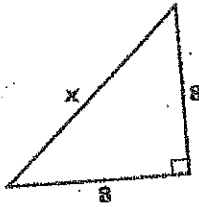
2.



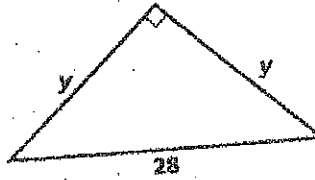
3.



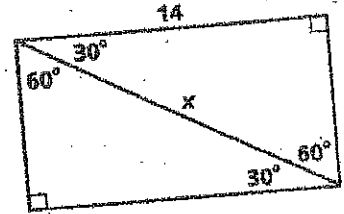
4.



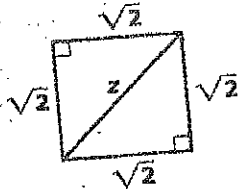
5.



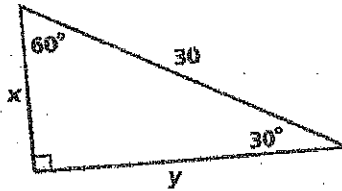
6.



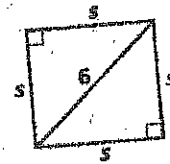
7.



8.

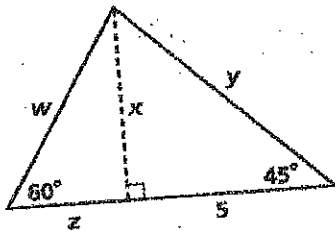


9.

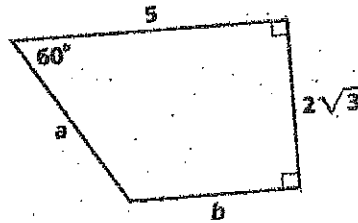


*Algebra* Find the value of each variable. Leave your answers in simplest radical form.

14.



15.



16.

